

# 湊數回讚

04月每月一題

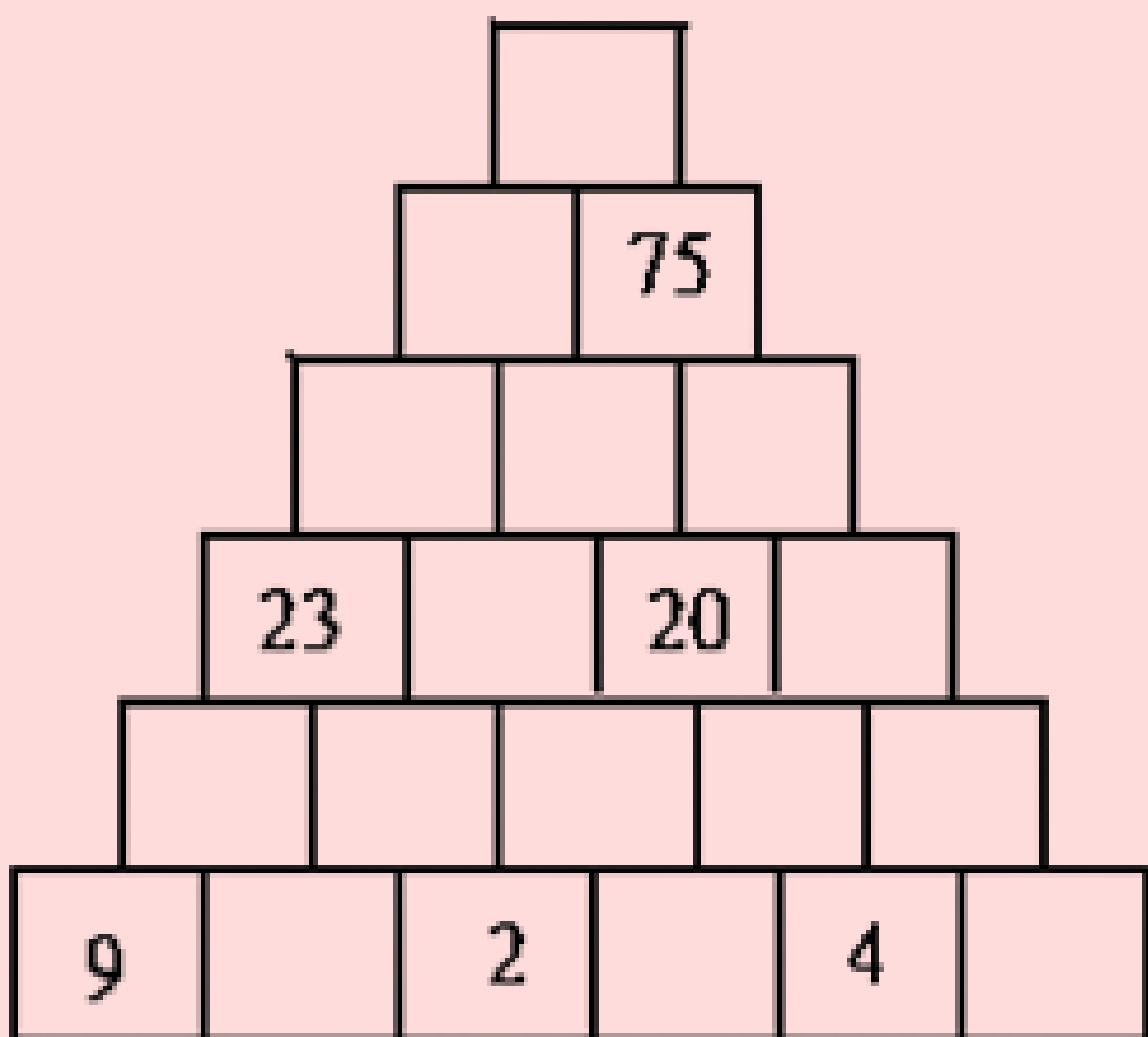
2025.04.01


## 【金字塔PYRAMID】

遊戲規則(不要抄別人的答案，自己試試看):

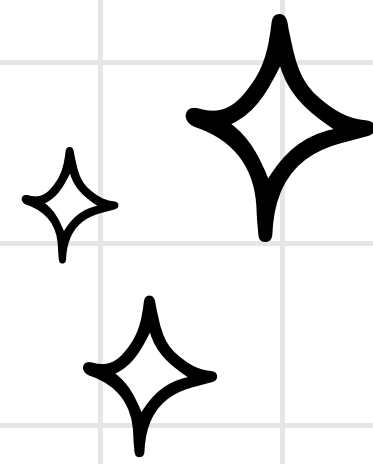
下圖「金字塔」中每一個空格的數是底下兩個空格內的數之和。

Q:請找出每個空格的數各是多少？(若有算式或特殊的解題技巧可直接於學習單上說明，跟大家分享你的思考方式喔！)





# 湊數回讚



MATH PROBLEM OF  
THE MONTH-APRIL

2025.04.01

## [PYRAMID]

GAME RULES: (DON'T COPY OTHERS' ANSWERS-TRY SOLVING IT YOURSELF!)

EACH SPACE IN THE PYRAMID BELOW CONTAINS A NUMBER THAT IS THE SUM OF THE TWO NUMBERS DIRECTLY BELOW IT.

Q: CAN YOU DETERMINE THE NUMBER IN EACH SPACE? (IF YOU HAVE ANY EQUATIONS OR SPECIAL PROBLEM-SOLVING STRATEGIES, FEEL FREE TO WRITE THEM ON THE WORKSHEET AND SHARE YOUR THOUGHT PROCESS WITH EVERYONE!)

